

Assignment No: 1

Subject: Math

Name: \_\_\_\_\_

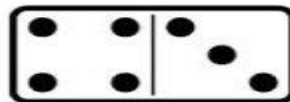
Class/Sec: \_\_\_\_\_

Date: \_\_\_\_\_






1. Count the items and write the number :








2. Match the shapes with objects :



3. Complete the missing counting:-

				
1	11	21	31	41
3	13	23	33	43
5	15	25	35	45
7	17	27	37	47
9		29		49
10	20	30	40	50

4. Count and match:-

3	•	•	
10	•	•	
5	•	•	
8	•	•	
7	•	•	

5. Tick the big ball

<input type="checkbox"/>			<input type="checkbox"/>
--------------------------	-------------------------------------------------------------------------------------	-------------------------------------------------------------------------------------	--------------------------